

Тест
Числата до 1000

1. Продължи редиците с още 3 числа:

а) 503, 504, 505, , ,

б) 300, 400, 500, , ,

в) 795, 796, 797, , ,

2. Сравни числата:

$656 \square 565$

$725 \square 275$

$790 \square 709$

$983 \square 903$

$313 \square 193$

$808 \square 888$

3.

$$\begin{array}{r} + 400 \\ + 240 \\ \hline \end{array}$$

$$\begin{array}{r} + 345 \\ + 234 \\ \hline \end{array}$$

$$\begin{array}{r} + 789 \\ + 6 \\ \hline \end{array}$$

$$\begin{array}{r} + 437 \\ + 28 \\ \hline \end{array}$$

$$\begin{array}{r} + 258 \\ + 154 \\ \hline \end{array}$$

$$\begin{array}{r} - 560 \\ - 300 \\ \hline \end{array}$$

$$\begin{array}{r} - 497 \\ - 256 \\ \hline \end{array}$$

$$\begin{array}{r} - 791 \\ - 56 \\ \hline \end{array}$$

$$\begin{array}{r} - 680 \\ - 214 \\ \hline \end{array}$$

$$\begin{array}{r} - 804 \\ - 593 \\ \hline \end{array}$$

4. Пресметни:

$$\underline{20.7}$$

$$\underline{34.2}$$

$$\underline{47.3}$$

$180 : 3 =$

$999 : 3 =$

$826 : 2 =$

5. Реши числовите изрази:

$$40 \cdot 6 + 5 \cdot 30 =$$

$$402 \cdot 2 - 197 =$$

$$72.8 - 42 : 7 =$$

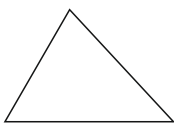
$$212 \cdot 4 - 309 =$$

$$127 \cdot 6 - 47 \cdot 4 =$$

6. Свържи фигурите с названието им:



триъгълник



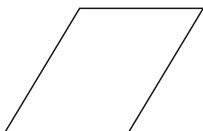
ромб



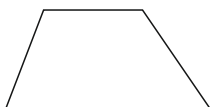
успоредник



квадрат



трапец



правоъгълник